
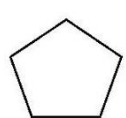
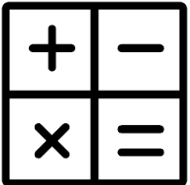


November Maths Masters – Y2

Monday	Tuesday	Wednesday	Thursday	Friday	Saturday	Sunday
2 List all the words you know for 'take away'.	3 Count forwards in 2s. See if you can get to 50.	4 Which number is smaller – 12 or 21? How do you know?	5 Can you partition the number 25 in 2 different ways?	6 What are all of the number bonds to 20?	7 Can you draw a square? What do you know about a square?	8 Is 2×10 the same as 10×3 ? How do you know?
9 List all the words you know for 'add'.	10 What is the total of 3, 16, 4 and 27? How can you do that quickly?	11 What coins can I use to make 26p?	12 Count backwards in 2s from 44 to 0.	13 What time does this clock say? 	14 What $7 + 8$? What other sums can you write which give the same answer?	15 If I have 50p and spend 31p, how much change do I get?
16 List all the words you know for 'multiply'.	17 What is the difference between 23 and 7?	18 What day is it in 6 days' time?	19 Which number is bigger – 13 or 31? How do you know?	20 Which fraction is bigger: $\frac{1}{4}$ or $\frac{1}{2}$? Can you draw it?	21 What do you call this shape? 	22 Is 35 in the 5 times table? How do you know?
23 List all the words you know for 'divide'.	24 What is the missing number in this calculation: $32 + \underline{\quad} = 50$?	25 What is double 16? How did you work it out?	26 What is the total of 13, 7, 13 and 8? How do you know?	27 What number is missing in the sequence? How do you know? 1, 1.5, 2, <u> </u> , 3.	28 What month comes after December?	29 How many ways can you make £1.13?
30 TRICKY QUESTION: How many minutes in 5 and a half hours?	<div style="display: flex; align-items: center; justify-content: center;">  <div style="margin-left: 20px;"> <p>Have a go at each of the questions for November.</p> <p>Can you draw your working out?</p> <p>Can you show it using a written method?</p> <p>Can you talk to someone about how you worked out your answers?</p> </div> </div>					